

TICK ON BIGGEST PICTURE



Name: _____ Date: ___/___/___ Score _____

WORKSHEET






Name: _____

Standard: _____ Age: _____

Date: _____




Match the following shapes



Triangle



Rectangle



Circle



Square

WORKSHEET

Name: _____

Standard: _____ Age: _____

Date: _____



PLACE VALUE WORKSHEET

Directions: Write the number described by each place value list below.

(1) 8 Ones = _____



(2) 3 Ones, 7 Tens = _____

(3) 1 One, 1 Ten = _____

(4) 5 Ones, 9 Tens = _____

(5) 5 Ones, 9 Tens = _____



(6) 7 Ones, 7 Tens = _____

(7) 4 Ones, 1 Ten = _____

(8) 9 Ones, 8 Tens = _____



(9) 8 Ones, 9 Tens = _____

(10) 5 Ones, 2 Tens = _____

WORKSHEET

Name: _____

Standard: _____ Age: _____

Date: _____



PLACE VALUE WORKSHEET

ANSWER SHEET

- (1) 8
- (2) 73
- (3) 11
- (4) 95
- (5) 95
- (6) 77
- (7) 14
- (8) 89
- (9) 98
- (10) 25

